

Name : _____

Score : _____

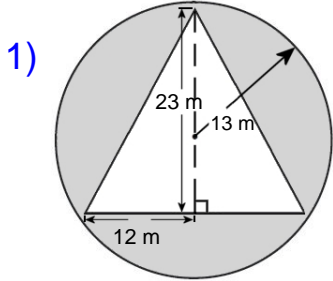
Teacher : _____

Date : _____

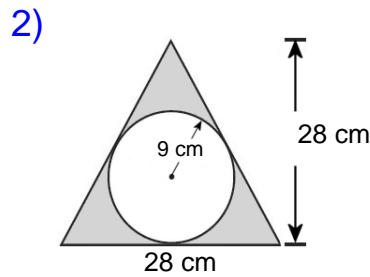
Compound Shapes

Complete all work on loose leaf paper. Show all work.

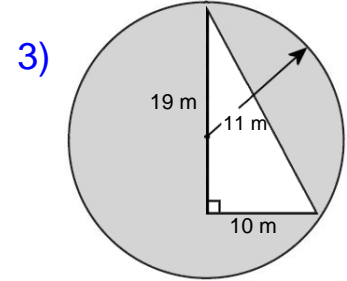
Find the area of each figure, round your answer to one decimal place if necessary.



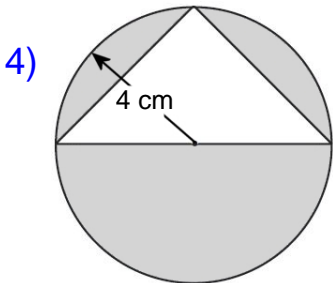
Area: _____



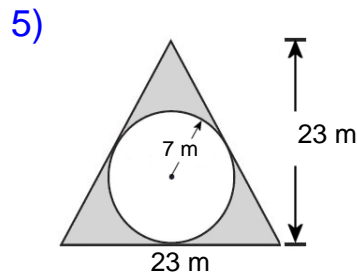
Area: _____



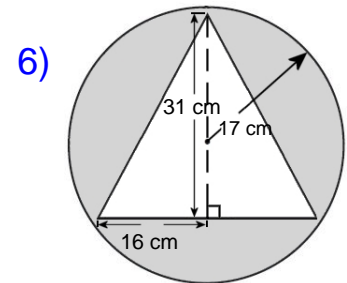
Area: _____



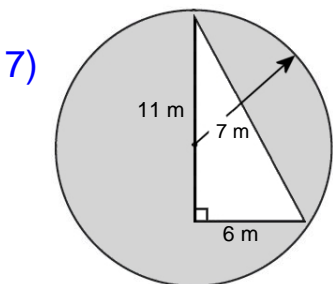
Area: _____



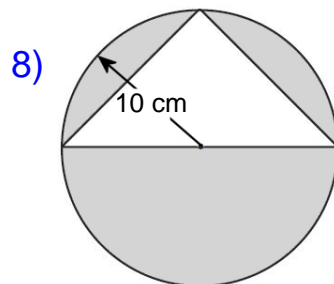
Area: _____



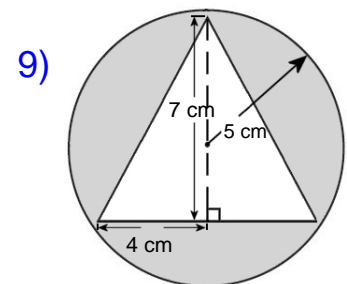
Area: _____



Area: _____



Area: _____



Area: _____

Hint: Remember you are taking something away from the original shape.

Name : _____

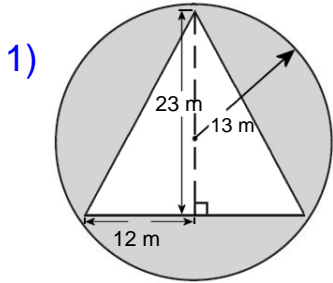
Score : _____

Teacher : _____

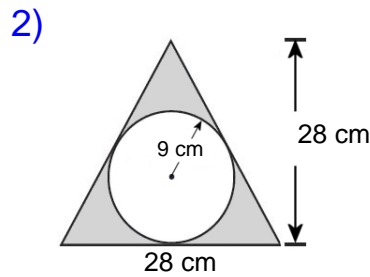
Date : _____

Compound Shapes

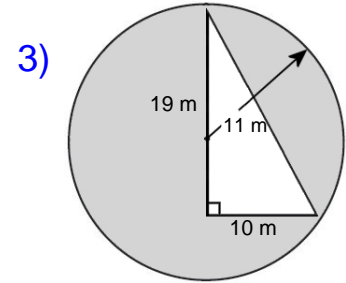
Find the area of each figure, round your answer to one decimal place if necessary.



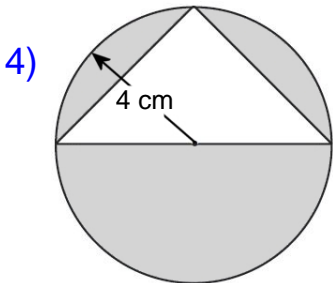
Area: 254.9 m²



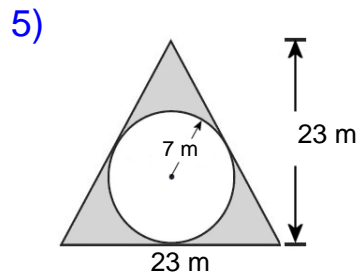
Area: 137.5 cm²



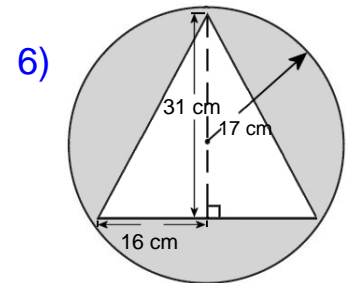
Area: 285.1 m²



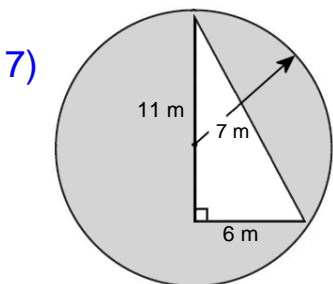
Area: 34.3 cm²



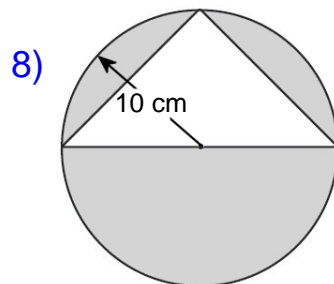
Area: 110.6 m²



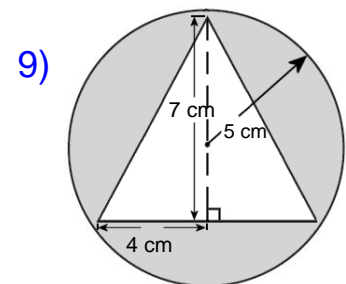
Area: 411.9 cm²



Area: 120.9 m²



Area: 214.2 cm²



Area: 50.5 cm²