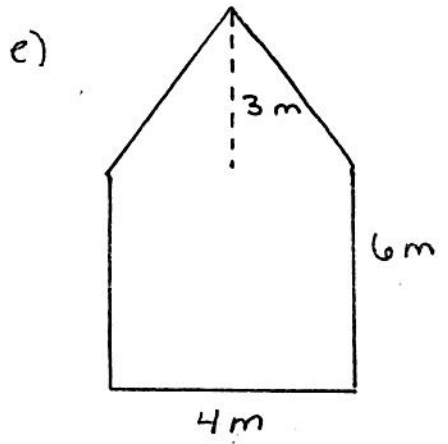
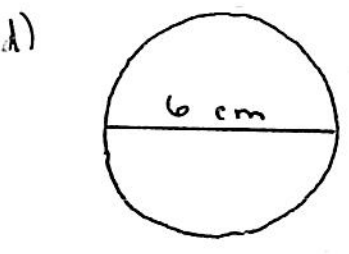
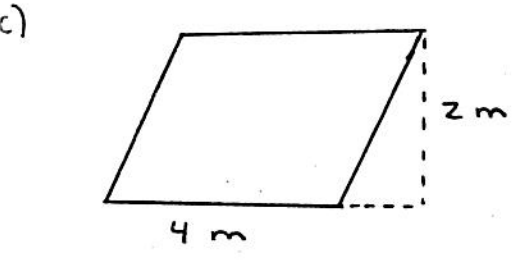
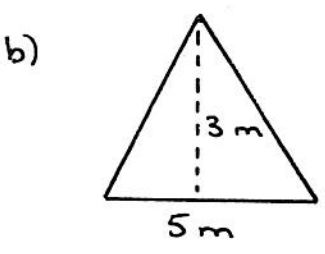
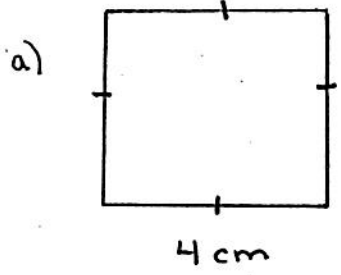
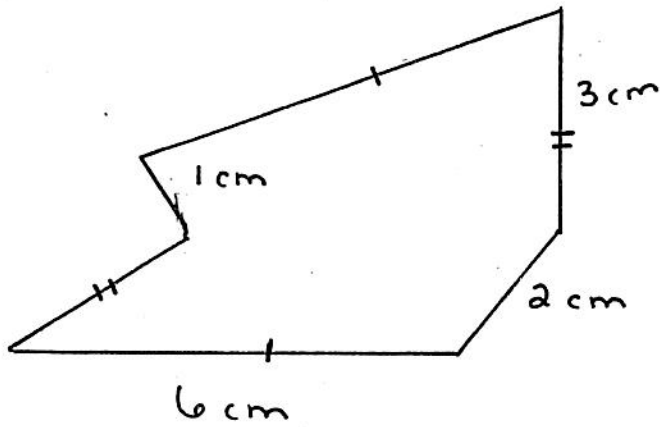


nom: _____

1. Trouve l'aire des figures suivantes. (26 pts.)



2. Trouve le périmètre (4 pts.)



3. Complète le tableau suivant (21 pts.)

	Km	m	cm	mm
a)		4,2		
b)				860
c)		0,6		
d)			251	
e)				1830
f)	5			
g)			200	

Bonne Chance
M. Duelllette