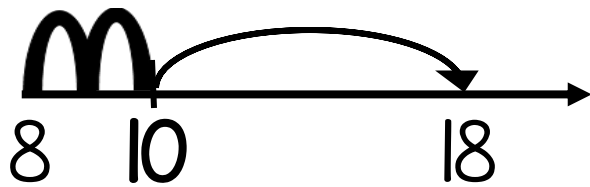
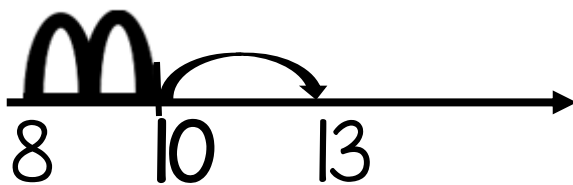


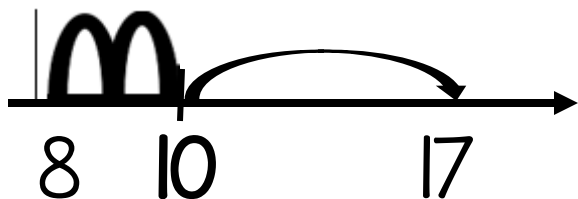
$$18 - 8 = \underline{\quad}$$



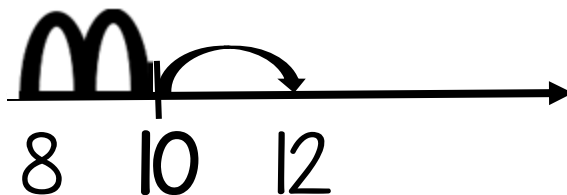
$$13 - 8 = \underline{\quad}$$



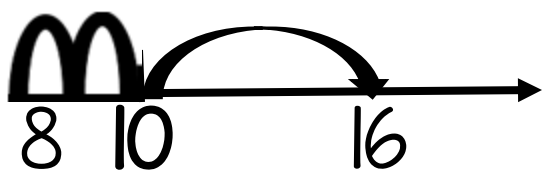
$$17 - 8 = \underline{\quad}$$



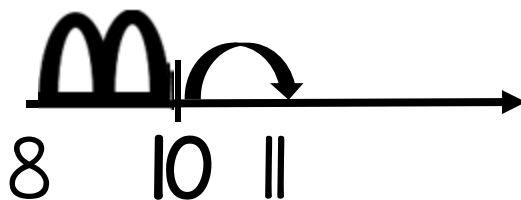
$$12 - 8 = \underline{\quad}$$



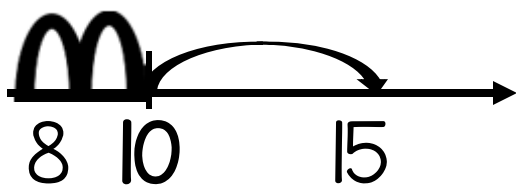
$$16 - 8 = \underline{\quad}$$



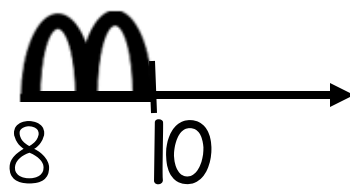
$$11 - 8 = \underline{\quad}$$



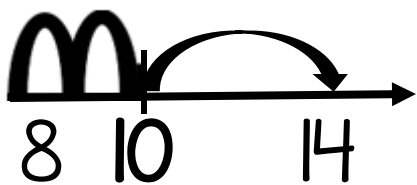
$$15 - 8 = \underline{\quad}$$



$$10 - 8 = \underline{\quad}$$



$$14 - 8 = \underline{\quad}$$



$$19 - 8 = \underline{\quad}$$

