


Name : _____

Counting Cubes - Rectangular Prisms

ES1

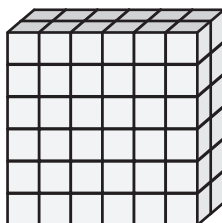
Count the unit cubes and find the volume of each rectangular prism.  = 1 cm³

1)




Volume = _____

2)



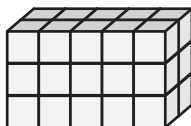
Volume = _____

3)



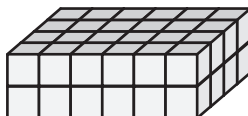
Volume = _____

4)



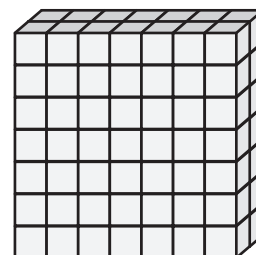
Volume = _____

5)



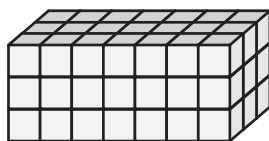
Volume = _____

6)



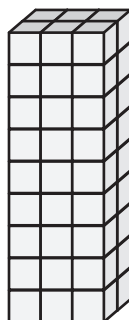
Volume = _____

7)



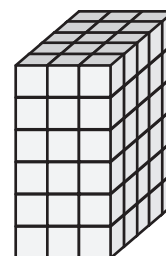
Volume = _____

8)



Volume = _____

9)



Volume = _____

Name : _____


Answer key

Counting Cubes - Rectangular Prisms

ES1

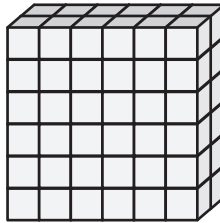
Count the unit cubes and find the volume of each rectangular prism.  = 1 cm³

1)




Volume = 84 cm³

2)




Volume = 72 cm³

3)



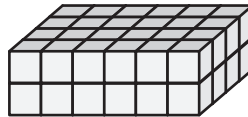
Volume = 60 cm³

4)



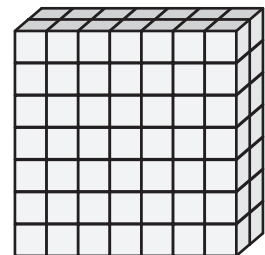
Volume = 30 cm³

5)



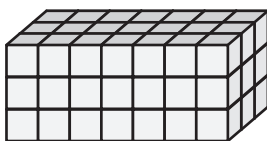
Volume = 48 cm³

6)



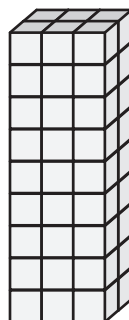
Volume = 98 cm³

7)




Volume = 63 cm³

8)



Volume = 54 cm³

9)



Volume = 90 cm³