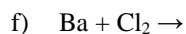
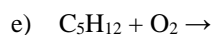
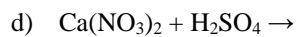
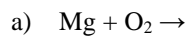


Questions to be completed and submitted to work towards credit earned in Chemistry 112.
Please email a picture or scanned copy of your work to Mrs. Arsenault.

Material covered May 25 – 29

1. Predict the products for the following equations:



2. For each of the equations above, state the type of reaction? (there may be more than one correct answer but you only need to give one)

a) _____

b) _____

c) _____

d) _____

e) _____

f) _____

g) _____